
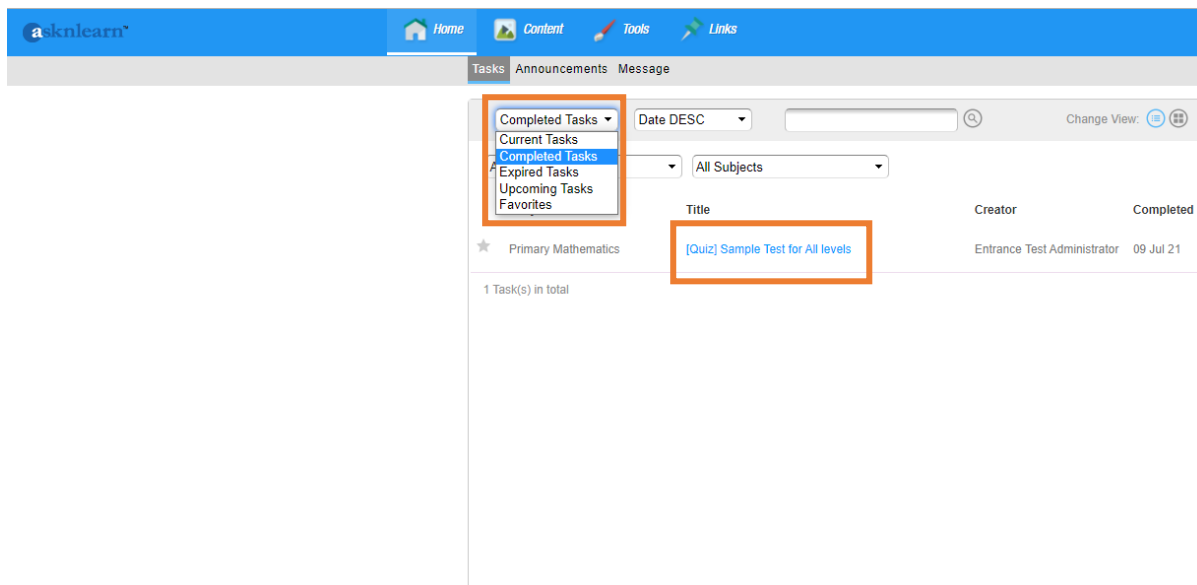
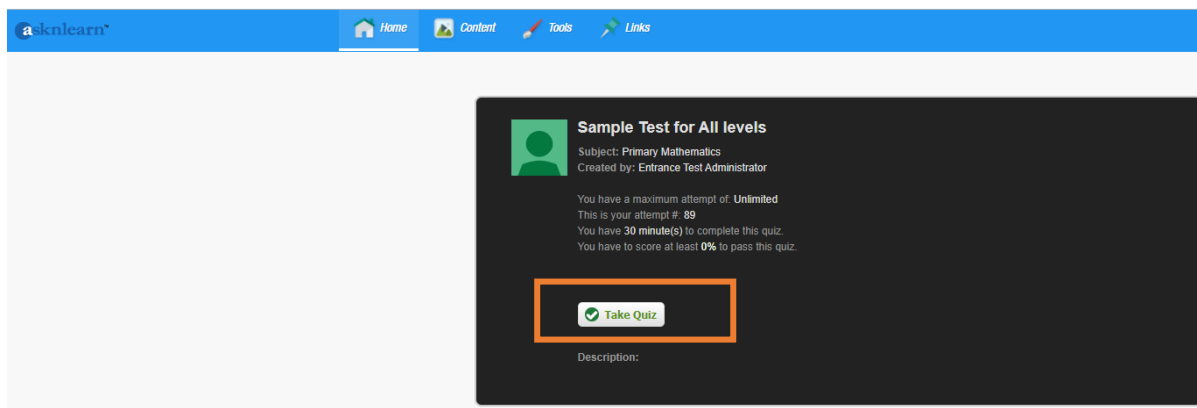


## How to access AsknLearn

- 1) Type in the following URL (<https://lms.asknlearn.com/syas>) to access AsknLearn
- 2) Type in the User ID and password and click on 
- 3) Select “**Completed Tasks**” and click the link to start the quiz



- 4) Try out the sample test to ensure that you are able to see the questions and diagrams/images.



5) Try out the “save” and “submit” button

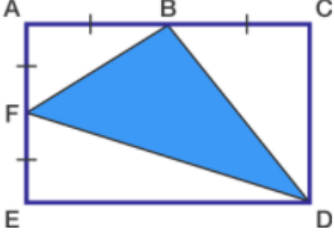
asklearn Home Content Tools Links

0:28:25

Sample Test for All levels

Assigned by Entrance Test Administrator

2.  
What is the percentage of the shaded region out of the whole rectangle?  
Ans:



3.  
Susan brought 30 roses. She put them equally into 5 vases. How many roses are there in each vase?  
 roses

4. If  $\text{☹} \text{☹}$  stand for 18  
What does  $\text{☹} \text{☹} \text{☹}$  stand for?  
 A. 55  
 B. 12  
 C. 27  
 D. 30

5.  
Mary, Bob and Alan have 30 marbles altogether. Mary has twice the number of marbles of Bob and Alan combine. How many marbles does Mary have ?  
Mary has  marbles.

6.  
Fill in the missing numbers.  
65 55   25

Note: This is a sample test to try out the functions and does not reflect the actual test.